

**JUNIOR LYCEUM ANNUAL EXAMINATIONS 2004**

Educational Assessment Unit – Education Division

**FORM 2**

**ICT**

**TIME: 1h 30min**

**NAME:** .....

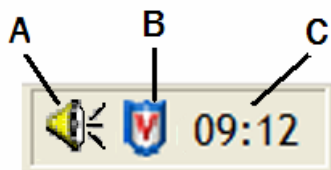
**CLASS:** .....

**Answer all questions**

- |   |   |
|---|---|
| 1. (a) Underline only ONE correct answer.   |   |
| i) You can protect your computer from a <b>virus</b> by                               |   |
| Carrying out regular defragmentation  |   |
| Saving all files to floppy disks  | 1 |
| Scanning files and updating anti-virus software                                       |   |
| Always using a password   |   |
| ii) Which of these is an <b>ADVANTAGE</b> of <b>email</b> ?                           |   |
| Receiving junk mail   |   |
| Emails may carry a computer virus   | 1 |
| It is fast  |   |
| Receiving a huge quantity of mail   |   |
| iii) Which <b>input device</b> is often used on a laptop computer?                    |   |
| Trackball   |   |
| Light pen   | 1 |
| Touch screen  |   |
| Touch pad   |   |
| iv) Why is it important to use a chair which is at the <b>correct height</b> ?        |   |
| To make sure there is enough light  |   |
| To avoid backache and other problems  | 1 |
| To prevent the computer overheating   |   |
| To reduce the risk of accidents   |   |
| v) <b>RSI</b> stands for  |   |
| Random Section Interface  |   |
| Report Serious Incidents  | 1 |
| Repetitive Strain Injury  |   |
| Rom Software Interface  |   |
| vi) Which of the following is <b>NOT</b> related to <b>health</b> and <b>safety</b> ? |   |
| A trailing power cable  |   |
| A chair that cannot be adjusted   | 1 |
| A slow processor  |   |
| Poor lighting   |   |

- vii) Which of the following is a **DISADVANTAGE** of **e-mail**?
- It is quick
  - Usually cheaper than using the telephone
  - Computer viruses may be transmitted by e-mail
  - You can send letters pictures and sound
- viii) A **hyperlink** is
- A telephone connection
  - A link to another web page
  - Communications software
  - A type of modem
- ix) What is a **trackball**?
- A monitoring system
  - A type of speaker
  - An alternative to the mouse
  - A storage device
- x) What is an **attachment**?
- A peripheral device
  - A file sent with an email message
  - Part of a network software
  - A password system

2. (a) The diagram below shows some **icons** found on the Windows desktop. Put the corresponding letter in each of the sentences below.



- i) The icon marked with the letter \_\_\_\_\_ represents the **anti-virus** program.
- ii) The icon marked with the letter \_\_\_\_\_ represents the **sound** control.
- iii) The area marked with the letter \_\_\_\_\_ can be used to set the **date** and **time**.

- (b) Why is a **screen saver** used?

---

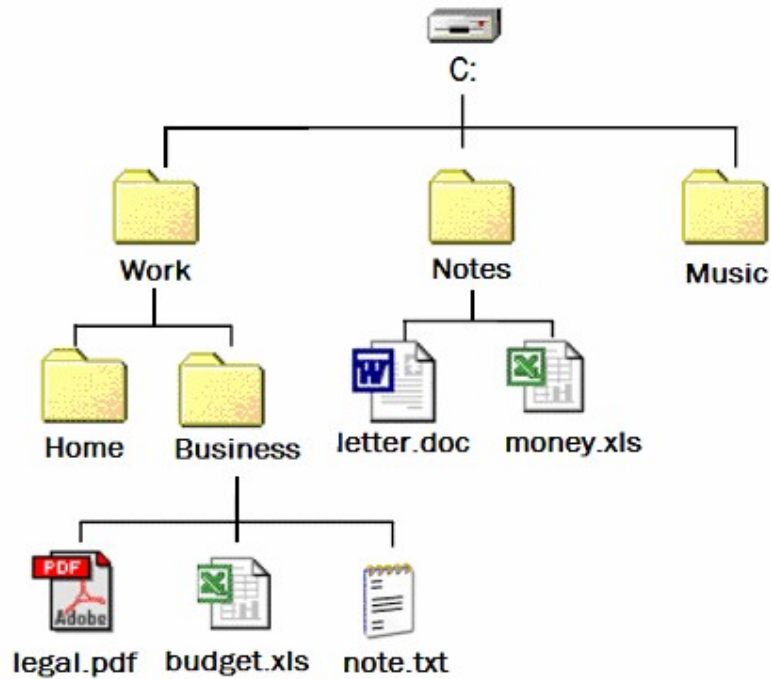


---

- (c) Name 3 ways how your computer can get a **virus**.

- i) \_\_\_\_\_
- ii) \_\_\_\_\_
- iii) \_\_\_\_\_

3. (a) John has the **folder** (directory) structure shown below on his computer. Study the diagram and answer the questions that follow.



- i) How many **folders** and **subfolders** are shown above? \_\_\_\_\_ 1
- ii) How many **files** are visible above? \_\_\_\_\_ 1
- iii) In which **drive** are the files and folders above stored? \_\_\_\_\_ 1
- iv) Write the **path** of the file *money.xls* \_\_\_\_\_ 1
- v) Which program was used to create the file *budget.xls*? \_\_\_\_\_ 1
- vi) Which program was used to create the file *letter.doc*? \_\_\_\_\_ 1
- vii) The folder *Business* is a subfolder of the \_\_\_\_\_ folder. 1
- viii) Name a **folder** which is usually always found on your computer.  
\_\_\_\_\_ 1
- ix) Describe how you can **change the name** of the file *note.txt* to *mynote.txt* .  
\_\_\_\_\_  
\_\_\_\_\_ 2

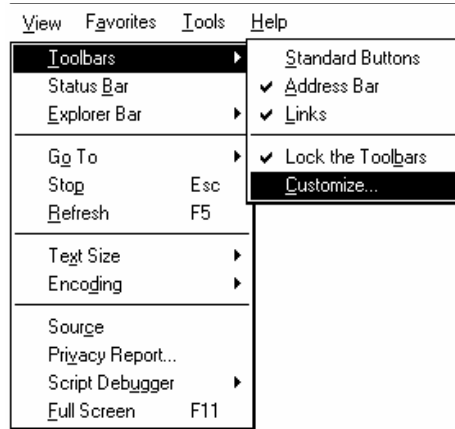
- (b) These are some of the files in the Windows folder of Martin's computer. Study the diagram carefully and answer the questions that follow.

File Name	Size	Type	Date	Time
explorer.exe	981 KB	Application	29/08/2002	02:41
Eyecycle.bmp	901 KB	Bitmap Image	09/11/2003	21:11
factory.ini	1 KB	Configuration Settings	19/03/2003	20:35
FaxSetup.log	122 KB	Text Document	18/09/2003	23:26
FeatherTexture.bmp	17 KB	Bitmap Image	18/08/2000	06:00
flash.kad	1 KB	KAD File	28/03/2003	19:40
flash.swf	384 KB	Shockwave Flash Obj...	28/03/2003	19:40
Gone Fishing.bmp	17 KB	Bitmap Image	18/08/2001	06:00
Greenstone.bmp	26 KB	Bitmap Image	18/08/2002	06:00
hh.exe	11 KB	Application	29/08/2002	02:41
HPW5CSS.INI	4 KB	Configuration Settings	13/11/2003	12:08
HPW5DSM.INI	1 KB	Configuration Settings	13/11/2003	13:55

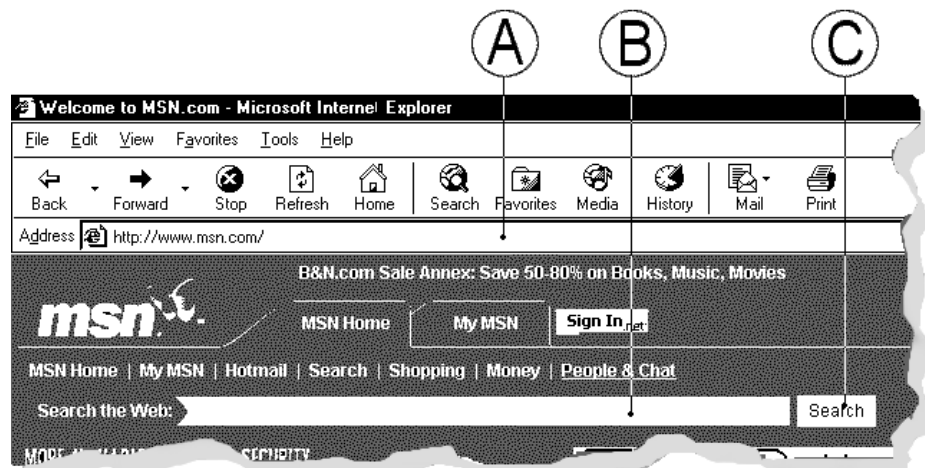
- i) How many **files** are shown above? \_\_\_\_\_ 1
- ii) Which is the **largest** file? \_\_\_\_\_ 1
- iii) What is the **size** of the smallest files? \_\_\_\_\_ 1
- iv) How many different **file types** are there? \_\_\_\_\_ 2
- v) In which year were the **newest** (most recent) files created? \_\_\_\_\_ 2
- vi) Which is the **oldest** file? \_\_\_\_\_ 2
- vii) The files above are **sorted** by \_\_\_\_\_ 2
- viii) To select the 3 files *hh.exe*, *flash.kad* and *factory.ini* to **copy** them together onto a floppy, Martin would press the \_\_\_\_\_ key from the keyboard and click on each of the three files. 2
- ix) To select the 2 files *Gone Fishing.bmp* and *Greenstone.bmp* to **delete** them together, Martin would press the \_\_\_\_\_ key from the keyboard, click on each of the two files and press the \_\_\_\_\_ key from the keyboard. 2


4. This question is about Internet and e-mail.

- (a) Marija is using the **View** on the menu bar (shown on the right) of her browser.



- i) Which **toolbar** has she turned off? \_\_\_\_\_ 1
- ii) What must she do in order to show the **hidden** toolbar?  
\_\_\_\_\_ 2
- iii) Which Key from the keyboard must she press in order to get a **Full Screen**?  
\_\_\_\_\_ 1
- (b) John has just connected to the Internet and is using his browser. Answer the questions that follow.



- i) What is the **URL** that he is using? \_\_\_\_\_ 1
- ii) Which **Browser** is he using? \_\_\_\_\_ 1
- iii) What should happen if John clicks on this icon  ?  
\_\_\_\_\_ 1
- iv) In which area (A, B or C) would he type the keywords to **search** for a web page?  
\_\_\_\_\_ 1
- v) If he wanted to search for information about **dolphins in the Mediterranean Sea**, what words (**keywords**) would he use?  
\_\_\_\_\_ 3

vi) Why would John add a particular web page to **Favorites**?

4

(c) Mr. Borg (Leli Borg) is writing an e-mail to some of his friends using the Schoolnet mail (shown below)

Display [addressbook] Filter: \_\_\_\_\_

**From:** leli.borg@gov.mt Send

**To:** jojo@waldonet.net.mt

**Subject:** Exams 130-8859-1

**Cc:** chris.cia@gov.mt

**Bcc:** \_\_\_\_\_

**Notify:**  when Delivered  when Read Send

Dear friends,  
This is to inform you that your exams will be held on the  
21st of December 2004.  
  
Best regards  
Leli

i) He is going to send his e-mail to two people. What are their e-mail addresses?

2

ii) What is Leli's e-mail address?

1

iii) To **login** into Schoolnet Mail, Leli Borg has to type in his

2

\_\_\_\_\_ and \_\_\_\_\_

5. This question is about Microsoft Word.

(a) Look at the **spell checker** below and underline the correct answers on the following page:

Spelling and Grammar: English (U.K.)

Not in Dictionary:

We would also like to thank Ms Lucy Vella, **Director**, for her constant support and direction, Mr Luke Galea for his contribution and all those teachers who have given us

Suggestions:

Director  
Directed  
Directory  
Directors


Dictionary language: English (U.K.)

Check grammar

Options... Undo Cancel

- i) To correct the word **Director** to **Director**, you should choose the [Ignore Once, Ignore All, Add to Dictionary, Change, Change All, AutoCorrect, Close] button. 3
- ii) To **skip** this word once and leave it as it is you should choose the [Ignore Once, Ignore All, Add to Dictionary, Change, Change All, AutoCorrect, Close] button. 3
- iii) To **skip it every time** it occurs in the passage you should choose the [Ignore Once, Ignore All, Add to Dictionary, Change, Change All, AutoCorrect, Close] button. 3
- iv) The **spelling checker** thought that the surname **Galea** is a spelling mistake. Underline the correct answer: 3  
 To make the spelling checker consider the word as correct you have to choose the [Ignore Once, Ignore All, Add to Dictionary, Change, Change All, AutoCorrect, Close] button.

(b) Deborah was writing the story on the right and she decided that the entire paragraph should look the same as the first two lines. She decided to use the **Format Painter**. Put these steps in order by entering **numbers**, to show her how.



- 1. She drags the Format Painter over the text she wants changed.
- 2. She clicks on the Format Painter button.
- 3. She selects (highlights) the first two lines.

(c) Deborah made this drawing in MS Word. Which **tools** did she use to draw it? **Underline** the correct answer: 2



- i. The Text Box.
- ii. The Table tool.
- iii. The Format Painter.
- iv. The AutoShapes.
- v. The Geometry Shapes.

(d) Deborah needs to insert **page numbers** in her document. How does she do this? **Underline** the correct answer. 3

- i. She chooses Format from the Menu bar and then Page Number
- ii. She chooses Tools from the Menu bar and then Page Number
- iii. She chooses Insert from the Menu bar and then Page Number
- iv. She chooses Insert from the Menu bar and then AutoNumber.

6. Robert created this spreadsheet showing the points of contestants in a school quiz.

	A	B	C	D	E	F	G
1							
2	General Knowledge Quiz - May / June						
3							
4			<b>Name</b>	<b>Surname</b>	<b>Points - May</b>	<b>Points - June</b>	<b>Total</b>
5			John	Mifsud	120	222	342
6			Winston	Attard	112	121	233
7			Franco	Costa	210	232	442
8			Charles	Zammit	222	122	344
9			Lawrence	Galea	202	412	614
10			James	Vassallo	122	213	335
11			Antonio	Gatt	232	523	755
12			John	Sciberras	235	222	457
13			Norman	Vella	325	232	557
14			Joseph	Zammit	143	411	554
15							
16				Average	192.3	271	463.3
17				Min	112	121	233
18				Max	325	523	755

i) Write the **formula** he used to find the **total** in cell G5.

\_\_\_\_\_

3

ii) Write the **formula** which he used to find the **average** in cell G16.

\_\_\_\_\_

3

iii) Write the **formula** he needs if he wants the **sum** of all the totals in cell G15.

\_\_\_\_\_

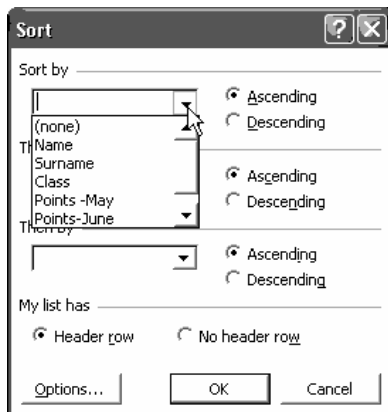
3

iv) After finishing his spreadsheet Robert decided that he needs a **new row** showing a new participating student. Put these statements in order (**by inserting the numbers**) to show him how to do this:

1. He chooses Insert from the Menu bar.
2. He selects row 8 by clicking once on the row header.
3. He chooses Rows from the drop-down menu.



3



v) Robert now decides to **sort** the names in alphabetical order. Should he choose Ascending or Descending so that the name starting with a "W" (Winston) is shown on top of the list?

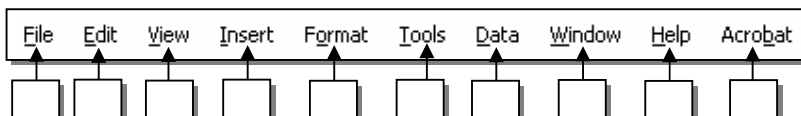
Put a  to choose the correct answer:

Ascending

Descending

2

vi) In which button of the menu bar does he find this **Sort** feature? Put a  to indicate the correct button:



3